

Instructions:

1. All questions are compulsory.
2. All questions must be answered in the question booklet itself in the space provided for this purpose.
3. All sub-questions under the main question carry equal marks.
4. Rough work, if required, may be done on the last few pages of this question booklet, provided for the purpose.
5. The candidate should not write their name, roll number or any other mark of identification anywhere on the question-cum-answer booklet (except for the space provided on the top sheet). Violation of this rule will lead to cancellation of the candidature.

Part-A (English)**30 Marks**

1.	Rewrite the sentences, as directed: (5)	
a)	Mr. Menon was driving his car. (Change this into a Negative Sentence) _____	
b)	Life is beautiful. (Change this into an Interrogative Sentence) _____	
c)	Oak Grove School is the _____ boarding school. (Fill this blank with the superlative form of 'good') _____	

Question No.	Question	Space for Answer
d)	Lalit was not caught cheating. (Change this statement into a Positive Sentence)	
e)	His son stood first in the race. (Change the gender of the noun and pronoun in the sentence)	
2.	Fill in the blanks with correct article: (a/an/the) (5)	
a)	Mumbai is ___ big city.	
b)	___ bag of Ashu was stolen.	
c)	He gave me ___ orange.	
d)	___ umbrella is ___ useful thing.	
3.	Fill in the blanks with correct form of adjectives given in brackets: (5)	
a)	Ashok is the _____ boy in the class. (clever)	
b)	This book is as _____ as yours. (good)	
c)	Sita is _____ than Raman. (lazy)	
d)	The weather is _____ today than it was yesterday. (bad)	
e)	His book is _____ than mine. (interesting)	
4.	Choose the correct _____ from the given list: (5) <i>collective nouns</i> (flock, pride, choir, bouquet, pack, flight, bunch)	
a)	A _____ of lions lived in the Gir forests.	
b)	Hari drove his _____ of sheep to the field.	
c)	A _____ of flowers was presented to Mrs. Brown.	
d)	We could see the _____ of birds in the sky.	
e)	A _____ of singers is waiting at the church.	

Question No.	Question	Space for Answer
--------------	----------	------------------

5.	Form the probable questions from the answers given below: (5)	
a)	I am fine, thank you. _____	
b)	I live in Jharipani, Mussoorie. _____	
c)	Jack is my friend. _____	
d)	Our team won the match. _____	
e)	My father is a businessman. _____	
6.	Describe the picture below in about five lines: (5)	



Question No.	Question	Space for Answer
d)	$21 \div \underline{\hspace{1cm}} = 1$	
e)	$349 + 142 - 102 - 189 = \underline{\hspace{1cm}}$	
f)	$214 \times 25 = 25 \times \underline{\hspace{1cm}}$	
2.	Find the missing numbers: (9)	
a)	$\begin{array}{r} \underline{\hspace{1cm}} \ 9 \ 2 \\ - \ 5 \ 3 \ \underline{\hspace{1cm}} \\ \hline 2 \ \underline{\hspace{1cm}} \ 6 \\ \hline \end{array}$	
b)	$\begin{array}{r} \underline{\hspace{1cm}} \ 4 \ 8 \\ + \ 5 \ 7 \ \underline{\hspace{1cm}} \\ \hline 8 \ \underline{\hspace{1cm}} \ 7 \\ \hline \end{array}$	
c)	$\begin{array}{r} 4 \ \underline{\hspace{1cm}} \ \underline{\hspace{1cm}} \\ - \ 2 \ 8 \ 5 \\ \hline \underline{\hspace{1cm}} \ 4 \ 9 \\ \hline \end{array}$	
3.	Answer the following: (6)	
a)	7 spiders have to share 49 flies. How many flies will each spider get?	
b)	There are 46 students in a class. If 21 are boys, how many girls are there in the class?	
c)	There are 8 packets of toys in a shop. Each packet contains 112 toys. Find the number of toys in the shop.	

Question No.	Question	Space for Answer
4.	Answer the following real life problems: (5)	
a)	Nisha travelled to Goa by ship. It took her 5 Days 11 hours to reach Goa. How many hours did she take to reach her destination?	
b)	The sports teacher asked the children to put 474 flags in 8 rows. How many flags could be put in each row? Were there any flags left?	
5.	Choose the most suitable answer for following questions: (4)	
a)	Which unit shall you use to measure water in a bucket? (mL/L/kL)	
b)	Which unit shall you use to measure distance between Delhi and Dehradun? (cm/m/km)	
c)	Which unit shall you use to measure the weight of a sack of flour? (mg/g/kg)	
d)	What could be the probable reference time when you wake up? (a.m./noon/p.m.)	

Part-C (Social Science)

20 Marks

Question No.	Question	Space for Answer
1.	Fill in the blanks: (5)	
a)	Atmosphere is the ____ surrounding the earth. (air/water/sunlight)	
b)	Plants absorb ____ through their roots. (air/water/sunlight)	
c)	Ducks have ____ feet. (long/webbed/round)	

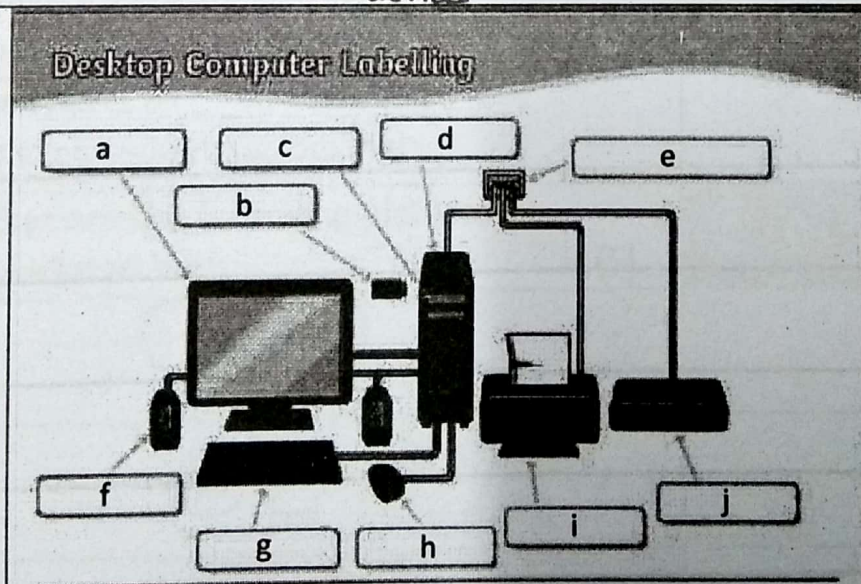
Question No.	Question	Space for Answer
--------------	----------	------------------

d)	Always cross the road at a ____ crossing. (rhino/tiger/zebra)	
e)	The Indian National Army was founded by _____. (Abul Kalam Azad/Rash Bihari Bose/Subhash Chandra Bose)	

2.	Write TRUE or FALSE: (5)	
----	---------------------------------	--

a)	Taj Mahal was built by Shahjahan.	
b)	The age of a tree can be estimated by the rings in their stem.	
c)	Bats are the only mammals that can fly.	
d)	Days and Nights are caused because of the revolution of Earth.	
e)	Cholera is caused by mosquitos.	

3.	Label the parts of the _____ given below: (5) devices	
----	---	--



a.

b.

c.

d.

e.

f.

g.

h.


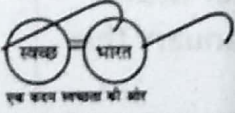



i.

j.

Question No.	Question	Space for Answer
--------------	----------	------------------

Part-D (General Knowledge)

20 Marks

Question No.	Question	Space for Answer
1.	Fill in the blanks by choosing the correct answer: (5)	
a)	A book to keep photographs is known as _____. (register/album/dictionary)	
b)	The Eiffel Tower can be found in the city of _____. (Paris/New York/London)	
c)	If you hear a lot of people around you speaking Telugu language, you are in the state of _____. (Andhra Pradesh/Bihar/Karnataka)	
d)	The largest continent on Earth is _____. (Asia/Antarctica/Africa)	
e)	Muhammad Ali's name is associated with the sports of _____. (cricket/swimming/boxing)	
2.	What are the following pictures associated with: (5)	
a)		
b)		
c)		
d)		
e)		

Question No.	Question	Space for Answer
3.	Fill in the blanks by choosing the correct answer: (5)	
a)	Printer is an example of an ____ device. (input/output/storage)	
b)	When we refer to QWERTY, we are referring to a _____. (keyboard/mouse/monitor)	
c)	_____ is known as the 'Father of Computers.' (Steve Jobs/Bill Gates/Charles Babbage)	
d)	In a keyboard, which key is used to type Capital Letters. (Scroll Lock/Caps Lock/Num Lock)	
e)	_____ is world's largest processor company. (Intel/Microsoft/Apple)	
4.	Current Affairs: (5)	
a)	Name the current President of India.	
b)	Which country won the Fifa World Cup held in 2022 in Qatar?	
c)	Which Indian athlete won a gold medal in Javelin Throw in 2020 Tokyo Olympics?	
d)	What is the name of the annual interactive program of Indian Prime Minister with school students, to be held in January this year?	
e)	Which Indian song won the Golden Globe Award (Oscar) for the Best Original Song in 2023?	

End of Question Paper

SPACE FOR ROUGH WORK